



**Sem 1:  
Review**

**Comprehensive Review**

1. Simplify  $2x - 9y + 4x + 11y$  by combining like terms and then evaluate at  $x = -2$  and  $y = 4$ .

---

2. Simplify  $2/6 - 1/7 + 3$

---

3. Simplify  $1 - 4(3z - 2) - 2(7 - z)$  and then evaluate at  $z = -5$ .

---

4. Solve for  $y$ :  $11(y - 2) + 2[y - 3(y + 1)] = 0$

5. Solve for p:  $-p - (5 - 6p) + (p + 8) = 15$

---

6. Solve for h:  $3(-h - 3) = -3(h + 1) + 2$

---

7. Solve this inequality and express the answer both symbolically and as a graph on a number line:  $3x - 11 \leq 4$

---

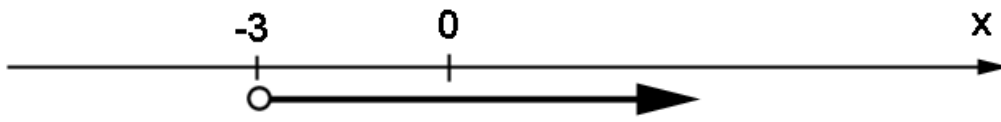
8. Solve this inequality and express the answer both symbolically and as a graph on a number line:  $4(2 + x) < 6x + 12$

9. Rewrite the inequality  $x \leq y$  after multiplying both sides by  $-6$ .

10. Define a variable and then write this expression algebraically:

"47 decreased by the width"

11. Write the inequality that describes this graph:



12. Which of the following is a solution to the inequality shown in problem 11?

$\{-5, -4, -3, -2, 11.304\}$

13. 26 is what percent of 79.2?

14. The length of a rectangle is 5 more than its width. What are the dimensions of the rectangle if its perimeter is 26?

15. What is the rate of commission on the sale of a car if the salesman makes \$300 on the sale of a \$4,700 used car?

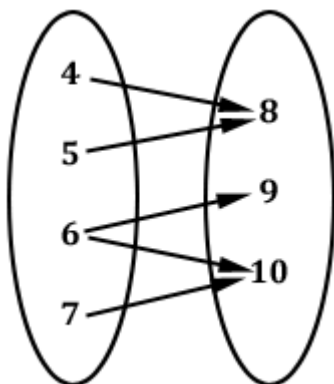
16. 29% of what is 172?

17. Convert .0289% to a decimal fraction.

18. Plot the point  $P(-8, 6)$  on a coordinate plane and then show a new point  $Q$  that is the reflection of  $P$  across the  $x$ -axis. In which quadrant is  $Q$ ?

19. What is the equation of a vertical line passing through  $(5, -6)$ ?

20. Find the domain and range of the relation represented by this mapping. Is it a function? Why?



21. Find the domain and range of the relation represented by this table. Is it a function? Why?

x	y
2	6
9	9
13	13
22	30

---

22. If  $f(x) = -x + 16x - 2$  and  $g(x) = 3x - 7$ , find the value of  $2g(3) - 5f(-1)$ .

---

23. A left-over dish is taken from a refrigerator at  $34^{\circ}\text{F}$  and placed in a  $250^{\circ}\text{F}$  oven. Sketch a graph of the temperature of the dish over the next few hours.

Which is the dependent variable?

Which is the independent variable?

The \_\_\_\_\_ is a function of \_\_\_\_\_  
and the functional notation is

\_\_\_\_\_

---

24. What is the equation of the line having a slope of  $-3/5$  and passing through the y-axis at  $y = 22$ ?

25. What is the equation of the line that passes through the x-axis just two units to the left of the origin and the point  $(-5, 12)$ ?

---

26. What is the equation of the line passing through the origin and perpendicular to the line given by  $3y + 2x = 7$ ?

27. What is the equation of the line that passes through  $(4, -8)$  and is parallel to the line given by  $y + 6 = 0$ ?

---

28. Examine these two linear equations and determine if their two-dimensional graphs are perpendicular, parallel, or neither. How many points would be in the solution to this system of equations?  $4y + 3x = 12$  and  $y - x + 234 = 1$

---

29. Examine these two linear equations and determine if their graphs are perpendicular, parallel, or neither. How many points would be in the solution to this system of equations?  $x = 4$  and  $17 - x = 0$

30. Examine these two linear equations and determine if their graphs are perpendicular, parallel, or neither. How many points would be in the solution to this system of equations?  $8x + 3 = -5y$  and  $16y - 10x + 1 = 0$

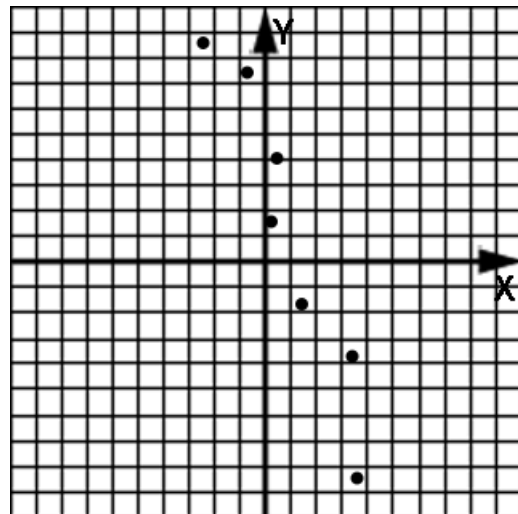
---

31. Draw a line that has an x-intercept of  $-6$  and a y-intercept of  $-10$ . What is the equation of this line? Which quadrants are touched by this line?

---

32. Draw a line of best-fit for this scatter plot and then find the equation of the line.

What is the correlation of this scatterplot?



33. Use a graphing calculator to make a scatter plot of the data in this table. Use linear regression to produce a line of best-fit. Sketch the calculator display.

<b>x</b>	<b>y</b>
-8	120
-4	82
-1	67
2	36
6	15
8	-5

34. What type of correlation does the data of problem 33 exhibit?

35. What is the slope (to two decimal places) of the line of best-fit?

36. What is the y-intercept (to two decimal places) of the line of best-fit?

37. What is the equation of the line of best-fit in slope-intercept form?



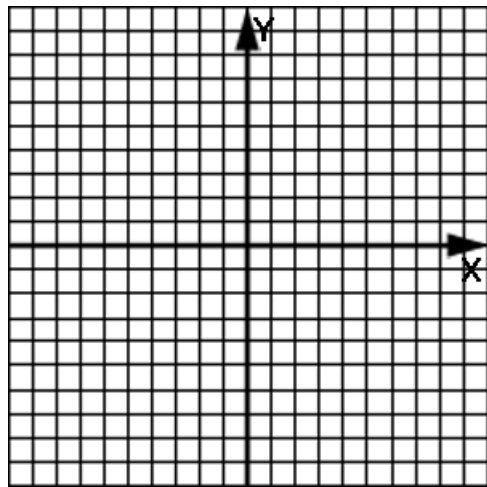
38. Determine if  $(4, -5)$  is a solution to this system:

$$y = 8x - 37; 4x + 6y - 1 = 0$$

---

39. Graph these two lines to find their intersection point.

$$x - 2y = 8; 2x + y = 1$$



---

40. Use the substitution method to find the intersection point of these lines:

$$x = 4y - 9; 2x + y = 9$$

41. Use the elimination method to find the solution to this system:

$$4x - 6y + 2 = 0; 2x - 5y = 11$$

---

42. Use the elimination method to find the intersection point of these two lines:

$$-7y - 2x = 5; x - 3y = 4$$

---

43. Use the substitution method to find the intersection point of these two lines:

$$2x - 5y = 2; 3x + y = 0$$

44. Use a graphing calculator find the intersection of these two lines. Make a sketch of the calculator display:

$$y = .37x + 2.01 ; y = -1.156x - 2.4$$

---

45. The number of boys in the class is 5 more than the number of girls. If there are 31 students in the class, how many girls are in the class?

---

46. The number of green birds is inversely proportional to the number of red birds. In one instance there were 33 green birds when there were 2 red birds. How many red birds can be expected when there are 22 green birds?

47. The profit  $p$  per unit varies as number of features  $f$  in the product. What is the constant of proportionality when 11 features yields a profit of \$23?

---

48. If  $g$  is directly proportional to  $h$  and  $g = 2$  when  $h = 3.4$ , what would be the value of  $h$  when  $g = 11$ ?